





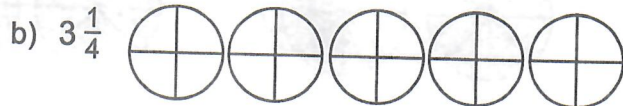


1. Write these fractions as mixed fractions and as improper fractions.



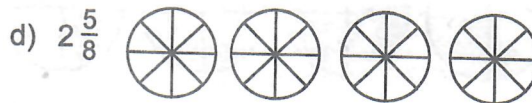
2. Shade the amount of pie given.

Then write an improper fraction for the amount of pie.



Improper Fraction: _____

Improper Fraction: _____




Improper Fraction: _____

Improper Fraction: _____


3. Shade one piece at a time until you have shaded the amount of pie given.

Then write a mixed fraction for the amount of pie.



Mixed Fraction: _____

Mixed Fraction: _____



Mixed Fraction: _____

Mixed Fraction: _____